

Date-24.01.24

Theme 9: Our Pastimes

Note → Do given work in
e.v.s worksheet

16 Having Fun!

Worksheet 1

A. Fill in the blanks.

1. We need rest after work or studying hard. (rest / work)
2. We have fun in doing things we enjoy. (enjoy / dislike)
3. We must rest and relax in our free time. (free / study)
4. We mostly play board games indoors. (indoors / outdoors)
5. There are many swings and slides in the park.
(park / classroom)

B. Write I for indoor game. Write O for outdoor game. *Do yourself*

- | | | | |
|-------------|-------|------------|-------|
| 1. ludo | _____ | 2. chess | _____ |
| 3. carom | _____ | 4. cricket | _____ |
| 5. football | _____ | | |

C. Write T for true or F for false.

1. We need to rest after studying hard.
2. We must rest and relax in our free time.
3. Recreation makes us feel bad.
4. Chess is an outdoor game.
5. Playing indoor games keep us fit and healthy.

True

True

False

False

False

Teacher's Signature: _____

Remarks: _____

Do yourself

A. Which of these is not an outdoor game? Circle the answer with a green crayon.

1. carom

2. cricket

3. football

4. slide

5. volleyball

B. Choose words from the box related to each game. Write them on the blanks.

rest and relaxation

indoor game

outdoor game

found in a park

animal recovery centre

1. chess

2. swings

3. animals

4. football

5. recreation

indoor game
found in a park
animal recovery centre
outdoor game
rest and relaxation

Do yourself
 C. Write T for true or F for false.

1. Chess is an outdoor game.

2. Four people can play a game of ludo at a time.

3. Cricket is played using a bat and a ball.

4. Football is played indoors.

5. There are many swings and slides in a park.

Do yourself (H.W)

Worksheet 3

A. Fill in the blanks.

1. _____ means to rest and relax in one's free time.
(Recreation / Games)
2. Playing _____ keeps us fit and healthy.
(indoors / outdoors)
3. _____ is a board game. (Ludo / Cricket)
4. _____ is an outdoor game. (Football / Chess)
5. We see puppet shows at a _____. (market / fair)

B. Rearrange the letters to complete the sentences.

1. We need ERST after studying hard. _____
2. We need to have UFN. _____
3. Recreation makes us feel OOGD. _____
4. Football is an TOUDOOR game. _____
5. There are many swings and slides in a ARPK. _____

C. Read the statements. Tick (✓) the correct ones.

1. It is important to have fun. ☐
2. We should play during study time. ☐
3. Indoor games keep us healthy and fit. ☐
4. Football is played indoors. ☐
5. We get to see wild animals at an animal recovery centre. ☐

Teacher's Signature: _____

Remarks: _____

■ Reading storybooks and watching films is fun.

Date - 24.01.24

Sub - E.V.S

I am a learner



Worksheet - 5

Ch - 16 (Pollution) Back



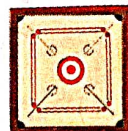
Notes → Do in Sem-2 book (Pg-80, 81) Back Exercise

A Colour the correct answer with a yellow crayon.

1. Do things you enjoy / dislike in your free time.



2. Carom / Football is an indoor game.



3. There are swings and slides in a bank / park.



4. Playing outdoors / indoors keeps us fit and healthy.



5. Football / Carom is an outdoor game.



Teacher's Note: *Tell the children that Jas calls his father's father 'Daarji.'

B Fill in the blanks.

1. Resting and relaxing make us feel good.
2. Chess is an indoor game.
3. Football is an outdoor game.
4. Playing outdoors keeps us fit and healthy.
5. Injured animals are treated in the recovery centre.

C Write short answers in your notebook.

1. What should we do in our free time?
2. Name a few indoor games.
3. Rahul, Rehman, Jason and Milli are playing a board game at home. Each of the player has different coloured game pieces. Which game is this?

D Choose the activities from the box. Write them in the correct columns.

play on a swing play board games ride a bicycle
go on a picnic read a book watch a film

Indoor Activities	Outdoor Activities
play board games	play on a swing
read a book	ride a bicycle
watch a film	go on a picnic

लिंग बदलो

- 1 पिता – माता
- 2 मामा – मामी
- 3 मुरगा- मुरगी
- 4 शेर – शेरनी
- 5 धोबी – धोबिन
- 6 माली – मालिन
- 7 नौकर – नौकरानी
- 8 भाई – बहन
- 9 लड़का – लड़की
- 10 राजा – रानी

गृहकार्य-इस कार्य को अपनी रफ कार्य पुस्तिका में लिखकर अभ्यास करें ।

St. Joseph's High School

Class: 2

Worksheet

Date: 24.01.24

Sub: English

Note: Do given work in fair notebook.

Q1 Who said these words and to whom?

1. Samurai, the brave fighters!

Ans. Roornima said to Baha.

2. They work slowly and steadily.

Ans. Baha said to Roornima

3. This is a smart card.

Ans. Zara said to Rina.

4. I am bored.

Ans Tashi said to Grandma.

5. Have you ever planted a tree?

Ans Teta said to children.

6. Go to sleep.

Ans Baha said to Roornima.

7. Have water. You will be okay.

Ans Zara said to gas.

Date- 24/01/2024

Do given work on
Maths worksheet

Worksheet 1

15

Data Handling

A. Fill in the blanks.

- The information that can be shown with the help of pictures is called a pictograph.
- In a pictograph, pictures are used as symbols in place of numbers in a pictograph.
- A pictograph is a visual representation of a list.
- A symbol represents number of symbols for one item.
- A table is represented in the form of a table.

B. Here is a list of trees in a school. Look at the list and fill in the blanks.

Name of tree	Neem	Mango	Peepal	Banyan
Number	5	7	3	8

- There are 3 peepal trees in the school.
- There are 7 mango trees in the school.
- Banyan tree is most in number.
- Peepal tree is least in number.
- There are 8 banyan trees in the school.

C. The different colour beads on a table are noted below. Look at the data and answer the questions in your notebook. Do yourself

red	orange	green	green	yellow	green	green
green	yellow	blue	orange	green	orange	green
green	orange	green	yellow	green	orange	red

- Which colour beads are most in number?
- Which colour beads are least in number?
- What is the number of orange beads?
- What is the number of red beads?
- What is the number of blue beads?

Teacher's Signature: _____

Remarks: _____

A. The different colour shirts in a shop are noted below. Look at the data and answer the questions in your notebook. *Do yourself*

blue	orange	green	blue	orange	red	blue
blue	yellow	blue	orange	blue	orange	green
orange	blue	green	yellow	blue	orange	red

1. Which colour shirts are most in number?
2. Which colour shirts are least in number?
3. What is the number of orange shirts?
4. What is the number of yellow shirts?
5. What is the number of green shirts?

B. Here is a list of flowers in a school. Look at the list and fill in the blanks.

Name of flowers	Lotus	Rose	Jasmine	Marigold
Number	10	12	25	18

1. There are 25 jasmine flowers in the school.
2. There are 12 rose flowers in the school.
3. Jasmine flower is most in number.
4. Lotus flower is least in number.
5. There are 18 marigold flowers in the school.

C. The favourite fruit of 30 children is given below. Read the list and state whether the statements are true or false.

Fruit	Apple	Banana	Pineapple	Orange
Number of children	7	12	3	10

1. Banana is the favourite fruit for most children.
2. Pineapple is favourite for 4 children.
3. Orange is the least favourite fruit.
4. Only 7 children have apple as their favourite fruit.
5. Orange is favourite for 12 children.

TrueFalseFalseTrueFalse






Teacher's Signature: _____

Remarks: _____

A. Fill in the blanks with correct option.







1. A _____ is the representation of information with the help of pictures. (pictograph/data)
2. A pictograph is represented in the form of _____. (box/table)
3. _____ are used as symbols in place of numbers in a pictograph. (numbers/pictures)
4. A pictograph is a pictorial representation of a _____. (table/list)
5. The representation of number of symbols for one item is known as _____. (key/list)

B. Look at the pictograph. Complete the list below using it.

Name of fruit	Number of pieces		
oranges	4	Oranges	
apples	6	Apples	
pears	9	Pears	
strawberries	2	Strawberries	
watermelon	5	Watermelon	

C. Look at the pictograph. Write the number in each case.

1. Number of girls in Class 1 = _____
2. Number of girls in Class 2 = _____
3. Number of girls in Class 3 = _____
4. Number of girls in Class 4 = _____
5. Number of girls in Class 5 = _____

Class	Number of girls
1	
2	
3	
4	
5	
 = 5 girls	

Teacher's Signature: _____

Remarks: _____

A. Look at the number of each kind of vehicles and complete the list. *Do yourself*

Vehicle	Bike	Bus	Car	Cycle	Aeroplane
Number					



~~B.~~ Look at the pictograph. Answer the following.

- apples sold in January = _____
- apples sold in February = _____
- apples sold in March = _____
- apples sold in April = _____
- least number of apples were sold in _____

Apples sold	
Jan	
Feb	
March	
April	
= 10 Apples	

C. Look at the data and write the cost of each of the following. *Do yourself*

- tractor _____
- aeroplane _____
- teddy bear _____
- car _____
- doll _____



Teacher's Signature: _____

Remarks: _____

Mental Maths

Date: 24/01/2024 Do this page yourself

A. What is the time on each clock?

1.



2.



3.




4.



B. Observe the images. Answer the following questions.

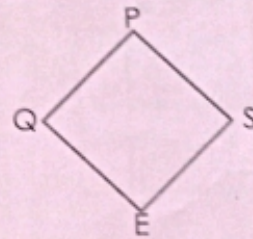
1.



points: _____

line segments: _____


2.



points: _____

line segments: _____

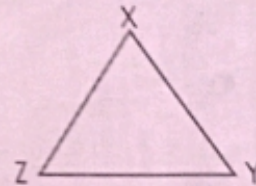
3.



points: _____

line segments: _____

4.



points: _____

line segments: _____

C. The given pictograph shows the favourite flavoured ice creams for the students of grade 2. Fill in the missing columns by finding the number of students.

Ice cream flavours	Pictograph	Number of students
Strawberry		
Vanilla		
Butterscotch		
Chocolate		

Each (●) = 4 students

Teacher's Signature: _____

Remarks: _____

St. Joseph's High School

Mandi Dabwali.

Class II Subject - Computer
Sections (A, B, C, D)

Revision Worksheet - 2

Homework :Learn and Write on Computer notebook.

Q1. Fill in the blanks.

1. A _____ is a small blinking line on the screen.
2. A mouse has _____ buttons.
3. The left mouse button is pressed _____ for double - clicking.
4. The Space bar key is the _____ key on the keyboard.
5. A _____ holds tools that are arranged in different groups.
6. _____ buttons are located at the extreme right of the title bar.

Q2. Write True or False :

1. Any information in a computer is saved in the form of a file .

2. CD,DVD and Pen Drive are storage devices.
3. The Oval tool is present in the Tools group.
- 3.In Paint , drawing is saved automatically .
4. A small arrow on the monitor is known as the mouse pointer.
5. The title bar displays the name of the program.
- 6.You cannot change the default settings of a mouse.